

10వ తరగతి మోడల్ పేపర్ - సాంఘిక శాస్త్రం

SOCIAL STUDIES PAPER - 2

Marks: 50

Time: 2-45 min

Instructions :

1. 15 Minutes are allotted for reading the question paper in addition to 2.30 hours for writing the answers.
2. All answers should be written in the separate answer booklet.
3. There are four sections in the questions.
4. There is internal choice in Section - IV.
5. Write answers should be visible and legible.

Section - I

Note :

1. Answer all Questions
2. Each Question carries ½ Mark.

$$12 \times \frac{1}{2} = 6$$

1. What is the meaning of the word "Meira Paibi" in Meitei language ?
2. Find the odd one out with reference to the power blocks during World War-II.
Britain Austria
France Russia
3. Identify the person in the picture who played a key role in the formation of the League of Nations.



4. Find out the wrongly matched pair and write it in your answer sheet.
Mao Zedong : China
Ho Chi Minh : Vietnam
Nnamdi Azikiwe : Nigeria
5. To throw out the British, he went secretly to Germany and then to Japan and raised an army of Indian soldiers in 1942. Who is the national leader mentioned here?

6. Identify the international organisation associated with the emblem given below. Write your answer in the answer paper.

International Organisations

- WHO
- UNO
- UNICEF



7. The slogan given by Gandhiji during the quit-india movement was _____.

8. Based on the relationship between the information in the first pair, complete the second pair.

India: Parliamentary System

America: ?

9. Study the information and answer the following question.

Coalition Governments and some political parties from 1980's

Governing Parties	United Front 1996-1998	Governing Parties	United Front 1998-1999	Governing Parties
JD; DMK; AGP; TDP; Jammu & Kashmir National Conference (JKNC)	JKNC; TDP; TMC; CPI; AGP; DMK; MGP; Samajwadi Party	JD; SAD; AIADMK; JKNC; Trinamool Congress; Biju Janata Dal; Shiva Sena;		
Supporting Parties CPM; CPI; BIP	Supporting Parties CPM	Supporting Parties TDP		

Name the national party which was a part of the United Front Government?

10. Conditions during economic depression.

Unemployment – Increased

Demand – Decreased

Prices - ? Complete the information.

11. Name the first person to land on Moon.

12. Arrange the countries from east to west based on their location

India, Japan, England, America

Section - II

Note :

1. Answer all Questions
2. Each Question carries 1 Mark.

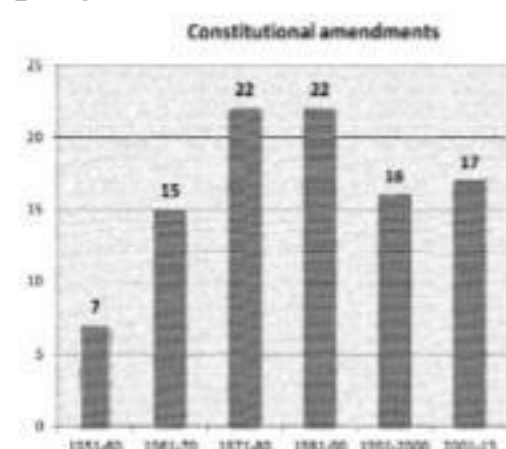
$$8 \times 1 = 8$$

13. Arrange the following movements in the correct chronological order.
Quit India movement
Vandemataram movement,
Civil disobedience movement
14. Which of the following is associated with the person shown in the picture ?



- i. Father of the nation
- ii. Chairman of the constitutional drafting committee
- iii. Chairman of constitutional assembly
- iv. First law minister

15. Answer questions 15 and 16 based on the graph given below.



- a) In which all decades' equal number of amendments was made to the constitution ?
- b) Who can amend the constitution of India ?

16. Write any two examples for regional parties of India.

17. Answer the following questions based on the map given below.



- a) Name the tribes living in the south-east part of this country ?
- b) This country was colonised by whom ?

10th Class New Pattern

18. Name the present secretary general of the UNO.

19. "In a war even the country which wins too loses". Comment.

20. How are Lok Adalats useful ?

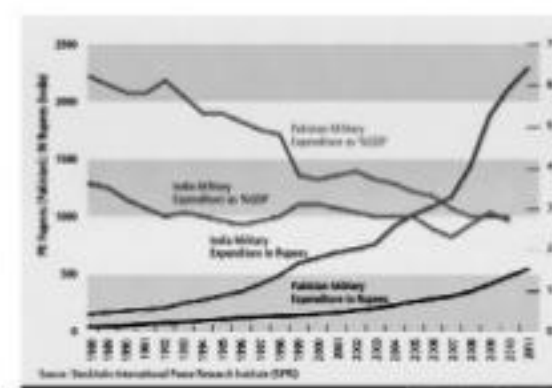
Section - III

Note :

1. Answer all Questions
2. Each Question carries 2 Marks.

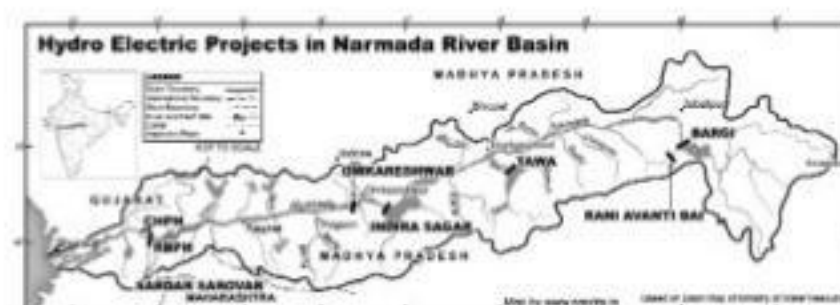
$$8 \times 2 = 16$$

21. What are the exemptions for disclosure as per the RTI act ?
22. Differentiate between unitary and federal systems of government ?
23. Explain about the non-aligned movement.
24. Write about the context of the famous speech "I have a dream" by Martin Luther King.
25. Study the graph given below and answer the following questions.



- a) This information is published by which institution ?
- b) Which country was spending more share of its GDP for military expenditure by the year 2000 ?

26. Answer the following questions based on the map given below.



- a) Where is the origin of the river Narmada
- b) Name any two hydro electric projects in the Narmada river basin ?

27. Explain the role played by Sardar Vallabhai Patel in the unification of states.

28. In what ways was the Emergency period a set back to the Indian democracy ?

Section - IV

Note :

1. Answer all Questions
2. Answer any one from internal choice of each question.
3. Each question carries 4 marks.

$$5 \times 4 = 20$$

29. Explain why the 20th century is called the century of extremes ?

OR

Describe the conditions that led to the partition of our nation.

30. "Though the first thirty years of independent India ended with emergency, if a balance sheet be drawn, there would be more credits than debits. Comment.

OR

Read the following paragraph and interpret.

"The Constitution thus has many provisions facilitating social change. The best example of this is the provision for reservations for Scheduled Castes and Scheduled Tribes in the Constitution. The makers of the Constitution believed that the mere granting of the right to equality was not enough to overcome age-old injustices suffered by these groups or to give real meaning to their right to vote."

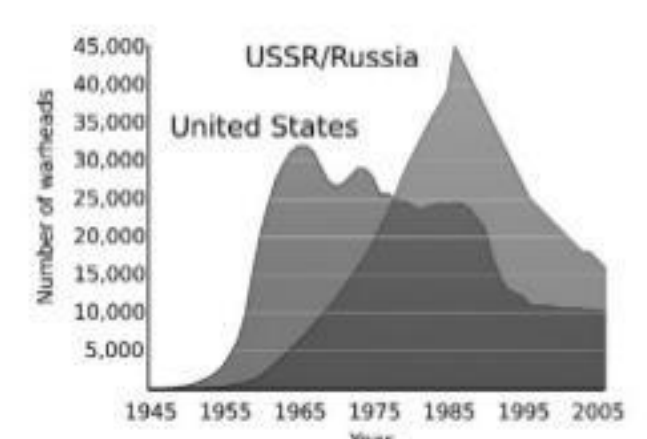
31. Study the timeline given below and answer the following questions.



- a) Name the organisation established for world peace after the World War I.
- b) In which year Hitler became the chancellor of Germany ?
- c) Russia withdrew from World War I before the end of it. Why ?
- d) Which peace conference led to the end of World War I ?

OR

Observe the following graph and write your interpretations.



32. Describe the relations between India and Pakistan.

OR

Explain the relevance of environmental movements like the Greenpeace movement in the present day world.

33. Mark the following on the outline map of the world.

- a) the country which was ruled by the Nazi party
- b) the motherland of Mussolini
- c) the country which used atom bombs in World War II
- d) the northern border of African continent

OR

- a) Brazil
- b) Vietnam
- c) China
- d) Egypt

