

TENTH CLASS MODEL PAPER (AP)

SUMMATIVE ASSESSMENT - 1

SOCIAL STUDIES (English Version)

Time: 3 Hrs. 15 Min.

Max.Marks: 100

Instructions:

1. 15 minutes of time is allotted to read the question paper and 3 hours for writing the answers.
2. All answers should be written in the separate answer booklet.
3. The paper consists of 4 sections and 33 questions.
4. There is an internal choice in Section - IV.
5. In Question number 33 both Inaida map and World map should be answered.

SECTION - I

Note: i) Answer All questions.

12 × 1 = 12

ii) Each question carries 1 mark.

iii) If any question is answered more than once in this section, the earlier answer will only be considered.

1. There are two major river systems in the Indian sub continent.
 - a) The himalayan river system.
 - b)
2. Name some green house gases.
3. Who participated in the Yalta conference?
4. Prepare any two slogans on the importance of Peace.
5. Draw the rough sketch of Andhra Pradesh outline map.
6. Indian economy is divided into three sectors.
 - a) Primary sector
 - b) Secondary sector
 - c) Third sector

Q. Which sector is called as tertiary sector?
7. Expand UNESCO.
8. Write any two welfare measures implemented by the state of Andhra Pradesh.
9. By 1947, August 15 all princely states signed the instrument of accession with India except?
10. Area wise which is the smallest and which is the largest state in India?
11. On what grounds the people of Kudankulam have protested against the project?
12. What were the paths adopted by Mahatma Gandhi and Subash Chandrabose during Indian freedom movement?

SECTION - II

Note: i) Answer All questions.

8 × 2 = 16

ii) Each question carries 2 marks.

13. Give suggestions for the betterment of employment in rural areas.
14. In what aspects do you appreciate Sardar Vallabhai Patel?
15. Write about the main causes which are responsible for two world wars.
16. How did the USSR form the influence of great depression?
17. Why do you think parents give less priority to girls education as compared to boys?
18. 'The importance of service sector is going on increasing day by day'. Do you support this statement? Why?
19. What were the agricultural reforms of Joseph Stalin in USSR?
20. Suggest the precautions we can take to prevent the spread of corona virus.

SECTION - III

Note: i) Answer All questions.

8 × 4 = 32

ii) Each question carries 4 marks.

21. Suggest measures to minimise the influence of global warming.
22. Which aspects of farming practices were regulated in the context of Hiware bazar to improve the water conservation?
23. In what way is the service sector different from other sectors? Explain with few examples.
24. Why did the Japanese allow Bose to recruit soldiers whom they had imprisoned?
25. Discuss the global impact of Russian Revolution.
26. Read the following paragraph and write your opinion on it.

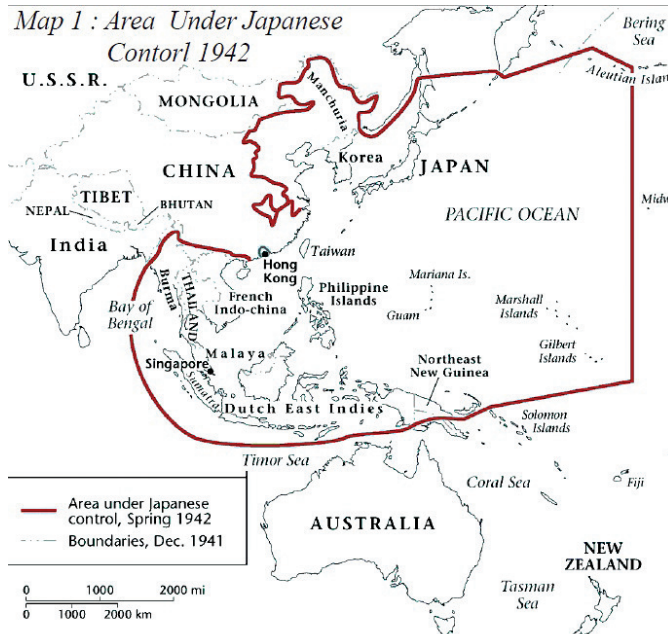
On 3rd March, 1933 the famous Enabling Act was passed. This Act established dictatorship in Germany. It gave Hitler all powers to sideline parliament and rule by decree. All political parties and trade unions were banned except for the Nazi party and its affiliates. The state established complete control over the economy, media, army and judiciary.

27. By studying the below paragraph, write the measures taken by your state government to improve schooling among children.

'Students in Himachal Pradesh come to school enthusiastically. An overwhelming proportion of students enjoyed their schooling experience'.

'The teachers love us and teach us well' said Neha, enrolled in class 4 in a village in Chamba. Children had dreams of studying till higher classes and aspirations to be policemen, scientists and teachers. The attendance rate was very high in primary classes, but also among older children.

28. Observe the below map and answer the following questions.



- What is Dutch East India and Burma called now?
- Name any two countries those are under control of Japan.
- Write any two countries which are out of control of Japan.
- Most of the area under the control of Japan is a part of which ocean?

SECTION - IV

Note: i) Answer All questions.

5 × 8 = 40

ii) Each question carries 8 marks.

iii) Each question has an internal choice.

29. a) How are the Eastern coastal plains and western coastal plains similar or different?

(OR)

b) Explain briefly the social and infrastructural needs of our country.

30. a) Do you find the presence of aggressive nationalism, imperialism power blocks and militarism around us today too? Give examples and discuss in the class.

(OR)

b) In what ways Jews were persecuted during Nazi Germany? Do you think in every country some people are differentiated because of their identity?

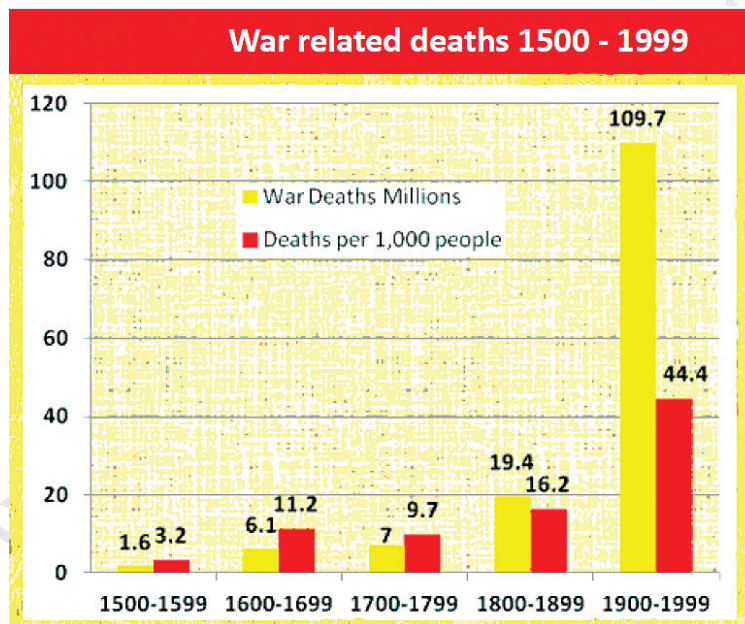
31. a) Read the time line chart and answer the following.



- Weimer Republic refers to which country?
- What was the immediate cause of the second world war?
- Write about the turning point of the second world war?
- Name the allied forces in the second world war?

(OR)

b) Read the following Bar graph and answer the questions that given below.



- What does the above information indicate?
- Write the reason about the highest number of war deaths.
- In which century do you find both war deaths and deaths per 1000 highest?
- Compare the war related deaths between 1700 - 1799 and 1800 - 1899.

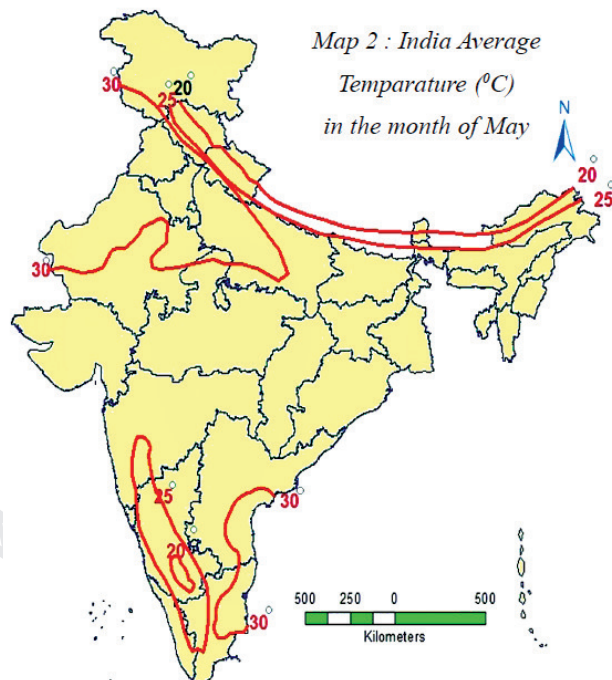
32. a) Read the below information and answer the following questions.

Traditional Indian Seasons		
Seasons	Months according to the Indian (lunar) calendar	Months according to the Western (solar) calendar
Vasantha	Chaitra - Vaishakha	March - April
Grishma	Jyestha - Ashadha	May - June
Varsha	Sraavana - Bhadra	July - August
Sharad	Aswayuja - Karthika	September - October
Hemanta	Margashira - Pushya	November - December
Shishira	Magha - Phalguna	January - February

- What is the first month according to lunar calendar?
- What is the last month according to Indian calendar?
- Name the Indian seasons of the year.
- Write the related months of western calendar those come under Sraavana - Bhadra months of Indian calendar.

(OR)

b) From the climographs, note the approximate average temperature for May for the four places and mark them on the below map.



S.No.	Places	Approximate average temperature
1	Bangalore	
2	Mysore	
3	Jaipur	
4	Simla	

33. a) Mark the following on the outline map of India.

1. Arunachal Pradesh 2. Delhi 3. River Narmada 4. Kanyakumari

(OR)

5. Junagadh 6. Sikkim 7. River Krishna 8. Raan of kutch

b) Mark the following on the outline map of the World.

1. Serbia 2. Japan 3. Meditteranean sea 4. USA

(OR)

5. Austria 6. Turkey 7. Red Sea 8. Germany

Writer: K.Srinivasa Rao